

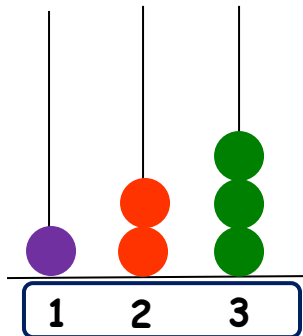
Name:

GRADE 3

Revision exercises : Abacus (3-digit numbers)

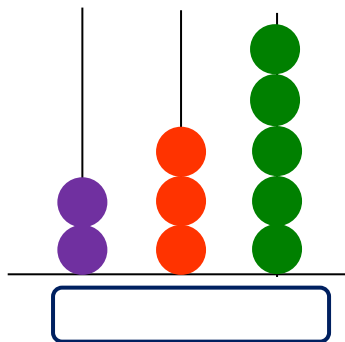
MATHS

Write the numeral shown on each abacus. The first one has been done for you.



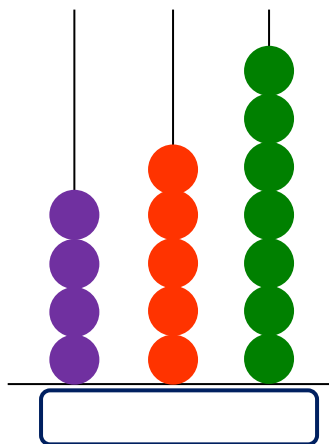
In figures : 1 2 3

In words : One hundred and twenty three



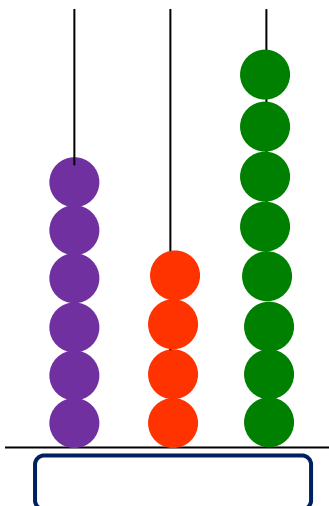
In figures : _____

In words : _____



In figures : _____

In words : _____



In figures : _____

In words : _____